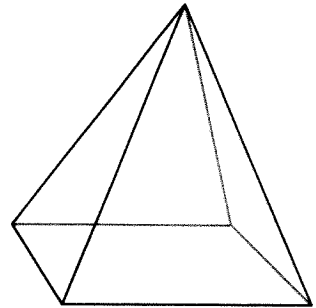

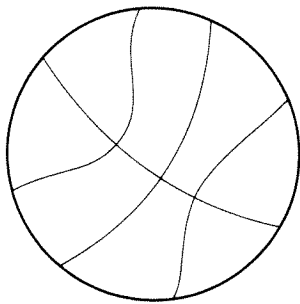


Lesson 71

1. Sasha has 18 magazines about doll collecting and 17 magazines about outdoor games. How many magazines about doll collecting and outdoor games does Sasha have?

Sasha has _____ magazines about doll collecting and outdoor games.

2. $24 - 15 =$
3. $125 + 10 =$
4. $73 + 14 =$
5. Look at the objects below. Circle all of the cones.

**Lesson 72**

1. $18 - 9 =$
2. There are 23 colored balls in a bag. If 19 of the balls are brown and the rest are red, how many red balls are in the bag?

_____ red balls are in the bag.

3. $10 + 224 =$

4. $64 + 19 =$

5. Circle the cylinder.

